

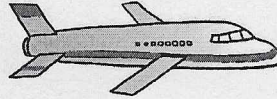

Name: _____ Date: _____

Science Kindergarten Studies Weekly

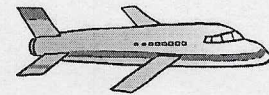

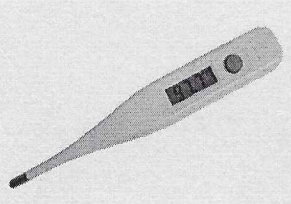
Week 10, Life Science

Technology Assessment

1. Circle the pictures that show ways technology helps us talk to friends and family. Put an X on the pictures that do not show ways technology helps us talk to others.



2. Circle the pictures that show ways technology helps us travel.



Which word in this box would make the sentences true? Write the word on the line in the sentence where it belongs.

jobs problems e-mail


3. We use computers and _____ to send messages.

4. Technology helps people do their _____.

5. People make new tools to help us solve _____ and do work.

Circle the best answer.

6. What does this thermometer measure?



how fast you can run

the temperature inside your body