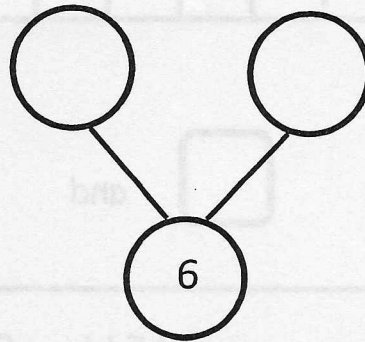
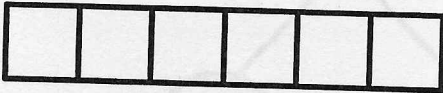


Name _____

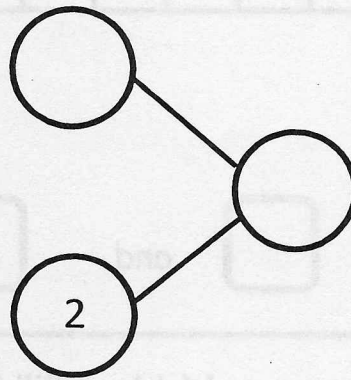
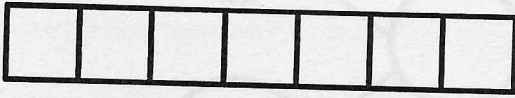
Date _____

These squares represent cubes. Color 5 cubes green and 1 blue. Fill in the number bond.



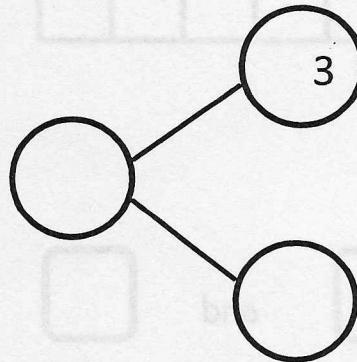
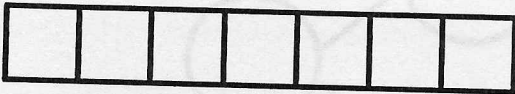
6 is and

Color 5 cubes green and 2 blue. Fill in the number bond.



is and

Color 4 cubes green and 3 blue. Fill in the number bond.



is and